



C. Nigerian Dwarf and Nubian

D. Toggenburg and Boer

10. \_\_\_\_\_ Which of the following is not a disqualification of a dairy goat:  
A. Double orifice in a buck's teat  
B. Doe with a crooked face  
C. Solid black Oberhasli buck  
D. Total blindness
11. \_\_\_\_\_ By adding the seriousness of the defects, place the following animals in the correct order: (1) A dark cream Saanen with slightly posty legs; (2) A mature Alpine doe that weighs 125 pounds and has a pendulous udder; (3) A mature Alpine doe is slightly posty and has slightly sprung pasterns; (4) A Saanen doe with a crooked face and moderately open shoulders.  
A. 3-2-1-4  
B. 1-4-3-2  
C. 1-3-4-2  
D. 3-1-2-4  
E. 2-3-4-1  
F. 4-3-1-2
12. \_\_\_\_\_ Which would not be an allowable marking on an Oberhasli doe:  
A. Pure black  
B. Ears that are black inside  
C. Black legs below knees and hocks  
D. Black face stripes  
E. None are acceptable  
F. All are acceptable
13. \_\_\_\_\_ An Alpine with white fore quarters and black rear quarters is referred to by which color pattern:  
A. Cou Noir  
B. Chamoisee  
C. Sungau  
D. Cou Blanc  
E. Cou Clair  
F. None of the above
14. \_\_\_\_\_ A large spot of white that is more than 1 ½ inch in any direction is reason for disqualification in which of the following cases:  
1. Oberhasli buck  
2. Toggenburg doe  
3. Oberhasli doe  
4. Toggenburg buck  
A. 1 and 4  
B. 2 and 4  
C. 1, 3 and 4  
D. 2 and 3  
E. 1, 2 and 3  
F. 2,3 and 4  
G. All are disqualified
15. \_\_\_\_\_ Which two breeds have the same minimum weight requirement for does?  
A. Toggenburg and Saanen  
B. Nubian and LaMancha  
C. Oberhasli and LaMancha  
D. Alpine and Nubian

**Answer the following questions with a "T" for true and "F" for false**

16. \_\_\_\_\_ The LaMancha breed is of African and Oriental origin
17. \_\_\_\_\_ A good market goat should be triangular in appearance, with the depth increasing from the front of the animal to the back
18. \_\_\_\_\_ High carcass yield grades is an important criteria in selecting Boer breeding stock
19. \_\_\_\_\_ The general appearance category of the scorecard for dairy and Boer bucks has the same number of points

- 20. \_\_\_\_\_ An ideal Nigerian Dwarf looks like a miniature French Alpine
- 21. \_\_\_\_\_ In Nigerian Dwarf classes, it is an advantage to be large for their age
- 22. \_\_\_\_\_ Short ears are acceptable on a Boer, as long as they are properly colored
- 23. \_\_\_\_\_ A dished face on a Nubian is a less important fault than a Roman nose on an Alpine
- 24. \_\_\_\_\_ Meat characteristics of a wether are generally observed in the hindquarters, loin, shoulder and neck
- 25. \_\_\_\_\_ The Dairy Character section of the scorecard specifically mentions these areas:  
Neck, withers, ribs, chest, flank, thighs and tail

**Match the following defects with the correct category from the Evaluation of Defects**

- SS (Slight to Serious) M(Moderate) S(Serious) VS(Very Serious) D(Disqualification)**
- 26. \_\_\_\_\_ Under or overshot jaw
  - 27. \_\_\_\_\_ Teats that are pointed sideways
  - 28. \_\_\_\_\_ Toggenburg doe that is black
  - 29. \_\_\_\_\_ Pendulous udder
  - 30. \_\_\_\_\_ Double teats
  - 31. \_\_\_\_\_ LaMancha doe that weighs less than 130 pounds

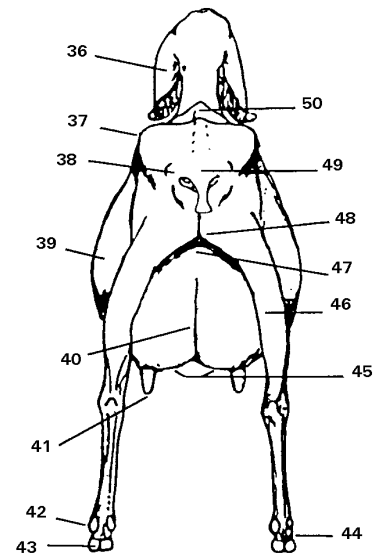
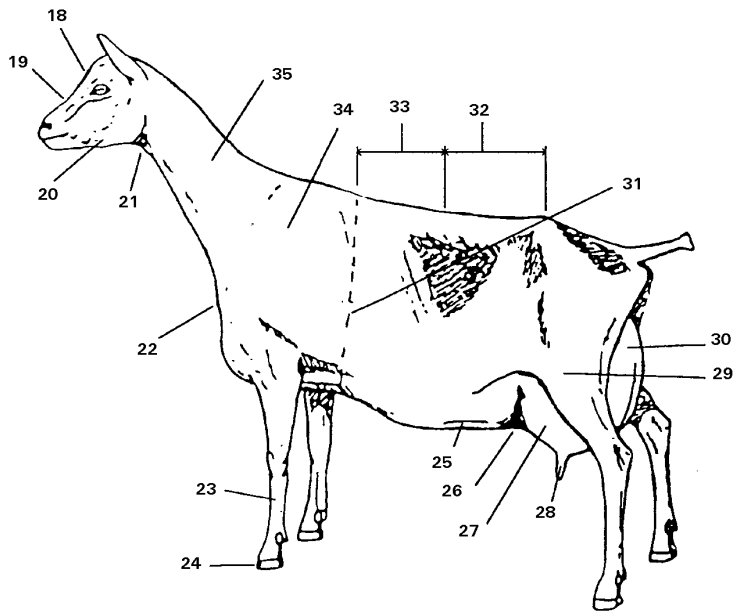
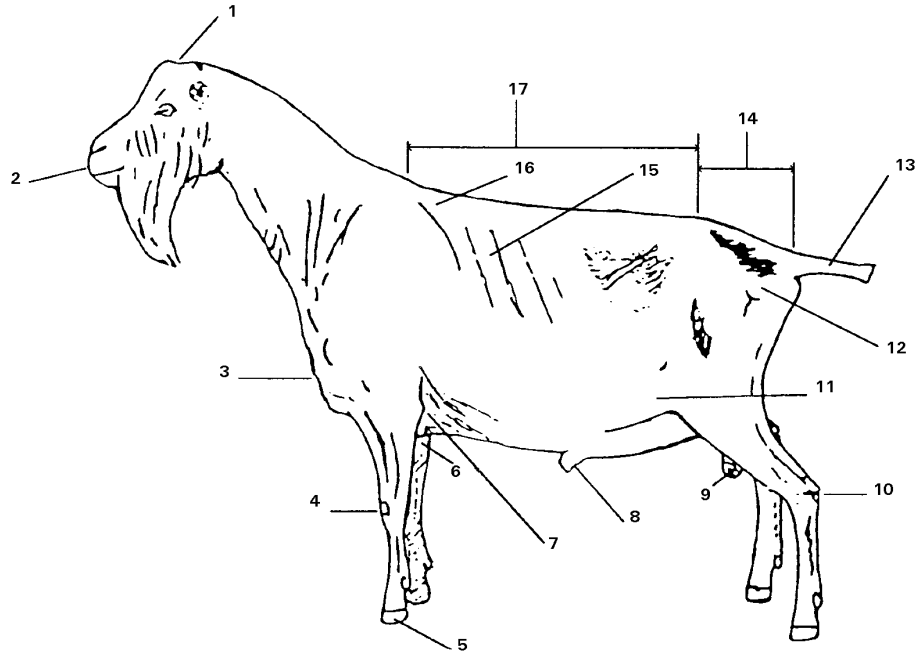
**Fill in the blanks on the dairy scorecard**

	Senior Doe	Junior Doe	Buck
General Appearance	32. _____	36. _____	39. _____
Dairy Character	33. _____	37. _____	40. _____
Body Capacity	34. _____	38. _____	41. _____
Mammary System	35. _____		

**Fill in the blanks on The IBGA scorecard**

	Senior Doe	Buck	Junior Doe
General Appearance	42. _____	45. _____	48. _____
Body Capacity	43. _____	46. _____	49. _____
Reproductive Organs	44. _____	47. _____	50. _____

Write the correct name of each numbered part on the next page



1. \_\_\_\_\_
2. \_\_\_\_\_
3. \_\_\_\_\_
4. \_\_\_\_\_
5. \_\_\_\_\_
6. \_\_\_\_\_
7. \_\_\_\_\_
8. \_\_\_\_\_
9. \_\_\_\_\_
10. \_\_\_\_\_
11. \_\_\_\_\_
12. \_\_\_\_\_
13. \_\_\_\_\_
14. \_\_\_\_\_
15. \_\_\_\_\_
16. \_\_\_\_\_
17. \_\_\_\_\_
18. \_\_\_\_\_
19. \_\_\_\_\_
20. \_\_\_\_\_
21. \_\_\_\_\_
22. \_\_\_\_\_
23. \_\_\_\_\_
24. \_\_\_\_\_
25. \_\_\_\_\_

26. \_\_\_\_\_
27. \_\_\_\_\_
28. \_\_\_\_\_
29. \_\_\_\_\_
30. \_\_\_\_\_
31. \_\_\_\_\_
32. \_\_\_\_\_
33. \_\_\_\_\_
34. \_\_\_\_\_
35. \_\_\_\_\_
36. \_\_\_\_\_
37. \_\_\_\_\_
38. \_\_\_\_\_
39. \_\_\_\_\_
40. \_\_\_\_\_
41. \_\_\_\_\_
42. \_\_\_\_\_
43. \_\_\_\_\_
44. \_\_\_\_\_
45. \_\_\_\_\_
46. \_\_\_\_\_
47. \_\_\_\_\_
48. \_\_\_\_\_
49. \_\_\_\_\_
50. \_\_\_\_\_